

ADVANCED SUBSIDIARY GCE

MATHEMATICS

Decision Mathematics 1

INSERT for Question 4

4736

Wednesday 17 June 2009
Morning

Duration: 1 hour 30 minutes



Candidate Forename		Candidate Surname	
Centre Number		Candidate Number	

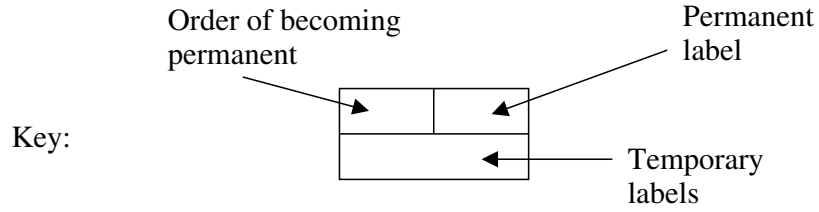
INSTRUCTIONS TO CANDIDATES

- Write your name clearly in capital letters, your Centre Number and Candidate Number in the boxes above.
- Use black ink. Pencil may be used for graphs and diagrams only.
- This insert should be used to answer Question 4.
- Write your answers to Question 4 in the spaces provided in this insert, and attach it to your Answer Booklet.

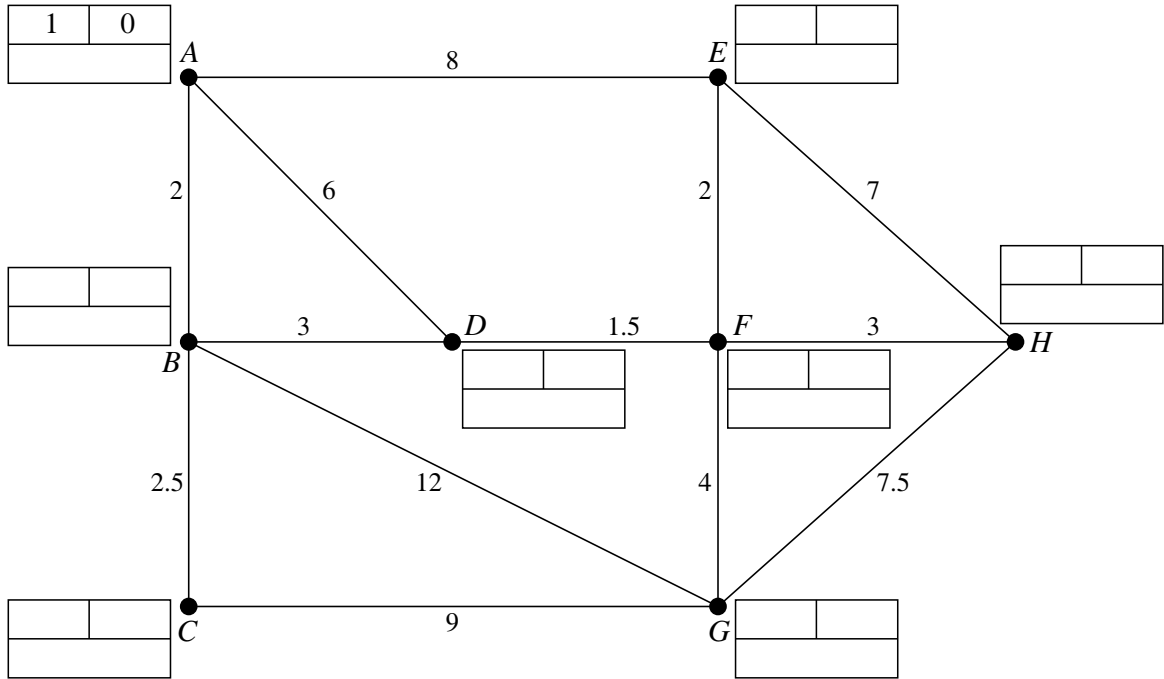
INFORMATION FOR CANDIDATES

- This document consists of 4 pages. Any blank pages are indicated.

4 (i)



Do not cross out your working values (temporary labels)



Route of shortest path from A to H =

Length of shortest path from A to H = miles

(ii)

(iii)

Length of shortest route = miles

(iv) Repeat arcs

Length of shortest route = miles

(v)

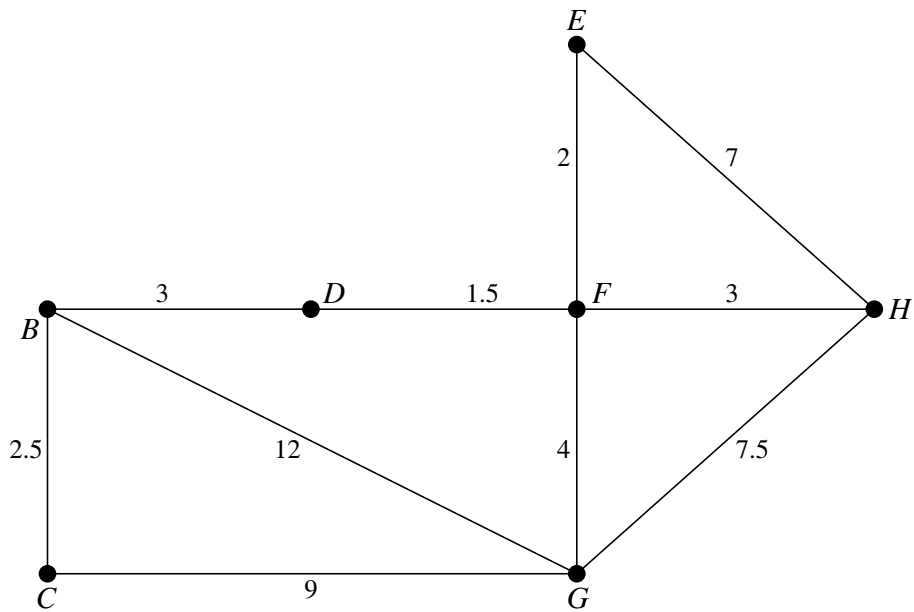
.....

(vi)

.....

Upper bound = miles

(vii)



Order of adding nodes to tree:

Total weight = miles

.....

.....

Lower bound = miles

**Copyright Information**

OCR is committed to seeking permission to reproduce all third-party content that it uses in its assessment materials. OCR has attempted to identify and contact all copyright holders whose work is used in this paper. To avoid the issue of disclosure of answer-related information to candidates, all copyright acknowledgements are reproduced in the OCR Copyright Acknowledgements Booklet. This is produced for each series of examinations, is given to all schools that receive assessment material and is freely available to download from our public website (www.ocr.org.uk) after the live examination series.

If OCR has unwittingly failed to correctly acknowledge or clear any third-party content in this assessment material, OCR will be happy to correct its mistake at the earliest possible opportunity. For queries or further information please contact the Copyright Team, First Floor, 9 Hills Road, Cambridge CB2 1PB.

OCR is part of the Cambridge Assessment Group; Cambridge Assessment is the brand name of University of Cambridge Local Examinations Syndicate (UCLES), which is itself a department of the University of Cambridge.