

Friday 20 January 2012 – Afternoon

A2 GCE MATHEMATICS

4723 Core Mathematics 3

QUESTION PAPER

Candidates answer on the Printed Answer Book.

OCR supplied materials:

- Printed Answer Book 4723
- List of Formulae (MF1)

Other materials required:

- Scientific or graphical calculator

Duration: 1 hour 30 minutes



INSTRUCTIONS TO CANDIDATES

These instructions are the same on the Printed Answer Book and the Question Paper.

- The Question Paper will be found in the centre of the Printed Answer Book.
- Write your name, centre number and candidate number in the spaces provided on the Printed Answer Book. Please write clearly and in capital letters.
- **Write your answer to each question in the space provided in the Printed Answer Book.** Additional paper may be used if necessary but you must clearly show your candidate number, centre number and question number(s).
- Use black ink. HB pencil may be used for graphs and diagrams only.
- Answer **all** the questions.
- Read each question carefully. Make sure you know what you have to do before starting your answer.
- Do **not** write in the bar codes.
- You are permitted to use a scientific or graphical calculator in this paper.
- Give non-exact numerical answers correct to 3 significant figures unless a different degree of accuracy is specified in the question or is clearly appropriate.

INFORMATION FOR CANDIDATES

This information is the same on the Printed Answer Book and the Question Paper.

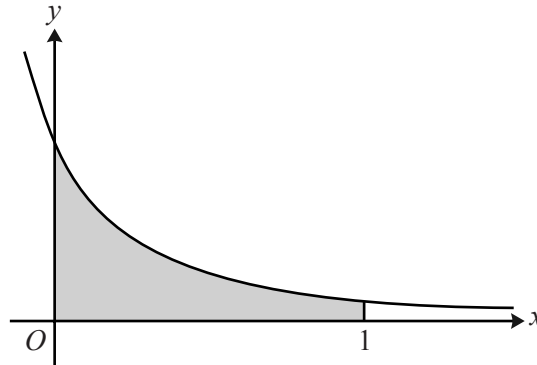
- The number of marks is given in brackets [] at the end of each question or part question on the Question Paper.
- **You are reminded of the need for clear presentation in your answers.**
- The total number of marks for this paper is **72**.
- The Printed Answer Book consists of **12** pages. The Question Paper consists of **8** pages. Any blank pages are indicated.

INSTRUCTION TO EXAMS OFFICER/INVIGILATOR

- Do not send this Question Paper for marking; it should be retained in the centre or recycled. Please contact OCR Copyright should you wish to re-use this document.

1 Show that $\int_{\sqrt{2}}^{\sqrt{6}} \frac{2}{x} dx = \ln 3$. [3]

2



The diagram shows part of the curve $y = \frac{6}{(2x+1)^2}$. The shaded region is bounded by the curve and the lines $x = 0$, $x = 1$ and $y = 0$. Find the exact volume of the solid produced when this shaded region is rotated completely about the x -axis. [5]

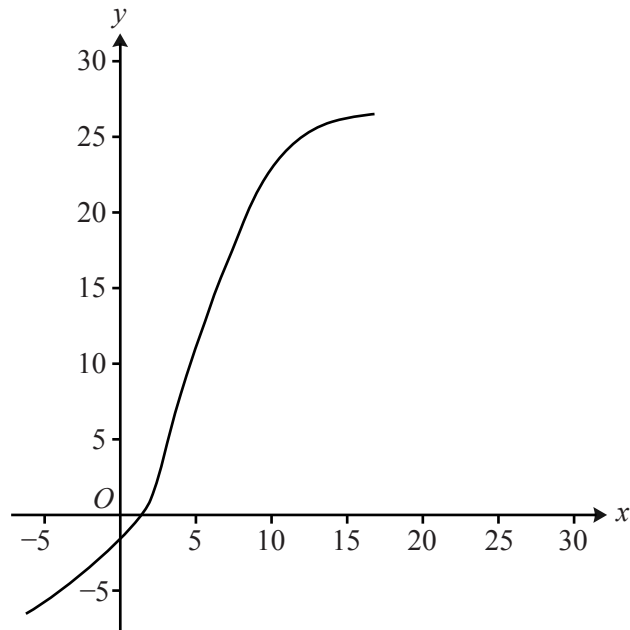
3 Find the equation of the normal to the curve $y = \frac{x^2 + 4}{x + 2}$ at the point $(1, \frac{5}{3})$, giving your answer in the form $ax + by + c = 0$, where a , b and c are integers. [7]

4 The acute angles α and β are such that

$$2 \cot \alpha = 1 \quad \text{and} \quad 24 + \sec^2 \beta = 10 \tan \beta.$$

(i) State the value of $\tan \alpha$ and determine the value of $\tan \beta$. [4]

(ii) Hence find the exact value of $\tan(\alpha + \beta)$. [3]

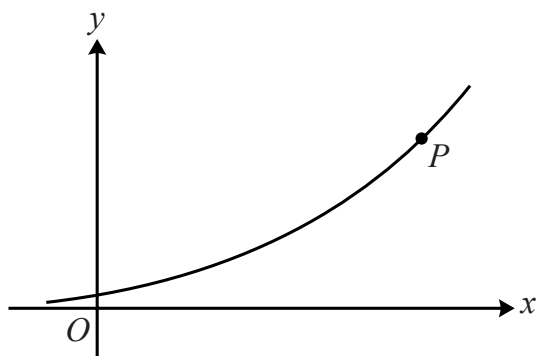


It is given that f is a one-one function defined for all real values. The diagram shows the curve with equation $y = f(x)$. The coordinates of certain points on the curve are shown in the following table.

x	2	4	6	8	10	12	14
y	1	8	14	19	23	25	26

- (i) State the value of $ff(6)$ and the value of $f^{-1}(8)$. [2]
- (ii) On the copy of the diagram, sketch the curve $y = f^{-1}(x)$, indicating how the curves $y = f(x)$ and $y = f^{-1}(x)$ are related. [2]
- (iii) Use Simpson's rule with 6 strips to find an approximation to $\int_2^{14} f(x) dx$. [4]

6



The diagram shows the curve with equation $x = \ln(y^3 + 2y)$. At the point P on the curve, the gradient is 4 and it is given that P is close to the point with coordinates $(7.5, 12)$.

(i) Find $\frac{dx}{dy}$ in terms of y . [2]

(ii) Show that the y -coordinate of P satisfies the equation

$$y = \frac{12y^2 + 8}{y^2 + 2}. \quad [3]$$

(iii) By first using an iterative process based on the equation in part (ii), find the coordinates of P , giving each coordinate correct to 3 decimal places. [5]

7 (i) Substance A is decaying exponentially and its mass is recorded at regular intervals. At time t years, the mass, M grams, of substance A is given by

$$M = 40e^{-0.132t}.$$

(a) Find the time taken for the mass of substance A to decrease to 25% of its value when $t = 0$. [3]

(b) Find the rate at which the mass of substance A is decreasing when $t = 5$. [3]

(ii) Substance B is also decaying exponentially. Initially its mass was 40 grams and, two years later, its mass is 31.4 grams. Find the mass of substance B after a further year. [3]

8 (i) Express $\cos 4\theta$ in terms of $\sin 2\theta$ and hence show that $\cos 4\theta$ can be expressed in the form $1 - k \sin^2 \theta \cos^2 \theta$, where k is a constant to be determined. [3]

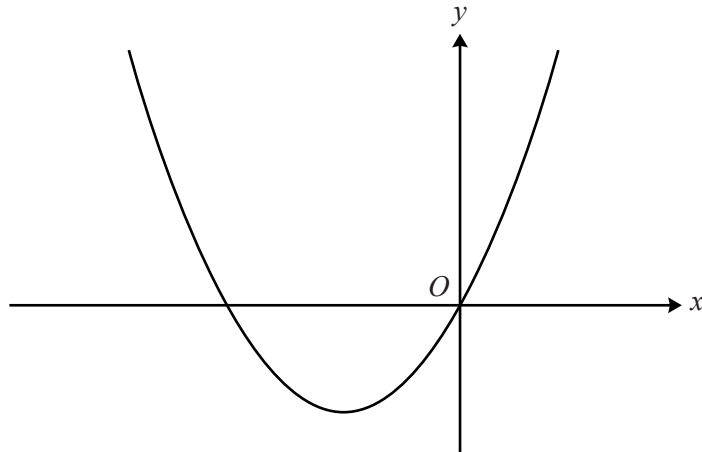
(ii) Hence find the exact value of $\sin^2(\frac{1}{24}\pi) \cos^2(\frac{1}{24}\pi)$. [2]

(iii) By expressing $2 \cos^2 2\theta - \frac{8}{3} \sin^2 \theta \cos^2 \theta$ in terms of $\cos 4\theta$, find the greatest and least possible values of

$$2 \cos^2 2\theta - \frac{8}{3} \sin^2 \theta \cos^2 \theta$$

as θ varies.

[5]



The function f is defined for all real values of x by

$$f(x) = k(x^2 + 4x),$$

where k is a positive constant. The diagram shows the curve with equation $y = f(x)$.

- (i) The curve $y = x^2$ can be transformed to the curve $y = f(x)$ by the following sequence of transformations:
 a translation parallel to the x -axis,
 a translation parallel to the y -axis,
 a stretch.

Give details, in terms of k where appropriate, of these transformations. [5]

- (ii) Find the range of f in terms of k . [2]

- (iii) It is given that there are three distinct values of x which satisfy the equation $|f(x)| = 20$. Find the value of k and determine exactly the three values of x which satisfy the equation in this case. [6]

BLANK PAGE

BLANK PAGE

THERE ARE NO QUESTIONS PRINTED ON THIS PAGE.



Copyright Information

OCR is committed to seeking permission to reproduce all third-party content that it uses in its assessment materials. OCR has attempted to identify and contact all copyright holders whose work is used in this paper. To avoid the issue of disclosure of answer-related information to candidates, all copyright acknowledgements are reproduced in the OCR Copyright Acknowledgements Booklet. This is produced for each series of examinations and is freely available to download from our public website (www.ocr.org.uk) after the live examination series.

If OCR has unwittingly failed to correctly acknowledge or clear any third-party content in this assessment material, OCR will be happy to correct its mistake at the earliest possible opportunity.

For queries or further information please contact the Copyright Team, First Floor, 9 Hills Road, Cambridge CB2 1GE.

OCR is part of the Cambridge Assessment Group; Cambridge Assessment is the brand name of University of Cambridge Local Examinations Syndicate (UCLES), which is itself a department of the University of Cambridge.